

International Olympiad of Science



Organized by:

Silverzone Foundation

New Delhi, India

For supremacy in Mathematics

www.silverzone.org

CLASS 2nd SAMPLE QUESTIONS

The Actual Question Paper Contains 25 Questions. The Duration of the Test Paper is 40 Minutes.

1. Which one of the following is the food for the animal given in the picture below?






- (A) Flesh (B) Fruits
(C) Vegetables (D) Rice

2. Steve's mother overcooked the food at home. What is the result of overcooking of food?

- (A) Loss of nutrients (B) Loss of salt
(C) Loss of spices (D) All of these

3. Which of the following is a rock?

- (A)  Slate (B)  Sandstone
(C)  Granite (D) All of these

4. Which one of the following options is correct for the picture of silkworm shown below?



- (A) It will grow to become an insect.
(B) It will grow to become a snake.
(C) It will grow to become a bird.
(D) It will grow to become a fish.

5. Leg muscle is shown below. Which of the following statements is incorrect for the given figure?






- (i) Muscles are covered with bones.
(ii) There are around 60 muscles in our body.
(iii) Bones are covered with muscles.

(iv) Our body has more than 600 muscles.

- (A) (i) and (ii) (B) (ii) and (iii)
(C) (iii) and (iv) (D) (i) and (iv)

6. Identify the wild animal from the options given below.

- (A)  (B) 
(C)  (D) All of these

7. Which one of the following processes is best explained in the picture given below?



- (A) Freezing (B) Melting
(C) Evaporation (D) Photosynthesis

8. Which one of the following statements is correct?

Statement 1: Living and non living things both are important for us.

Statement 2: Only living things are important for us.

- (A) Statement 1 is correct
(B) Statement 2 is correct
(C) Both statement 1 and 2 are correct
(D) Both statement 1 and 2 are incorrect

9. Which one of the following options contain only seeds?

- (A) Mustard, sugarcane, rice, carrot, broccoli
(B) Ginger, rice, wheat, corn, cabbage
(C) Wheat, rice, oat, corn, beans
(D) Wheat, cabbage, radish, corn, barley

10. Consider the following statements:

Harry: Our brain helps us to think.

Garry: Brain is a part of nervous system.

Larry: Spinal cord is also a part of skeletal system.

Who is correct?

- (A) Harry and Larry (B) Garry and Larry
(C) Harry and Garry (D) Harry, Larry and Garry

ANSWERS

1. (A) 2. (A) 3. (D) 4. (A) 5. (A) 6. (C) 7. (C) 8. (A) 9. (C) 10. (C)