



UNICUS OLYMPIADS

Sample Paper (2020-21)

Class 3

Unicus Cyber Olympiad



| Section – Class* <small>*Syllabus covered</small> | Total Questions | Marks per Questions | Total Questions |
|---|------------------------|----------------------------|------------------------|
| Classic Section – Class 2 | 23 | 1 | 23 |
| Classic Section – Class 1 | 7 | 1 | 7 |
| Scholar Section – Class 2 | 7 | 2 | 14 |
| Scholar Section – Class 1 | 3 | 2 | 6 |
| Grand Total | 40 | | 50 |

1. Which key from a keyboard do we use to begin a new paragraph?



Correct Answer: d

1 Mark

2. Identify the bar shown below:



- a) Menu Bar
c) Status Bar

- b) Title Bar
d) Tool Bar

Correct Answer: b

1 Mark

3. For which of the following purpose computers are not used in schools?

- a) For maintaining student records
b) For maintaining fee records of students
c) For promoting students to the next class
d) For writing circular

Correct Answer: c

1 Mark

4. Rearrange the letters to get the name of the given device:



- a) TPLPAO
c) TOMIRON

- b) TEMIRON
d) ETRNRIP

Correct Answer: d

1 Mark

5. Fill in the blanks:

A computer system converts raw _____ into useful _____.

- a) Data, Information
- b) Information, Process
- c) Information, Data
- d) Data, Process

Correct Answer: a

1 Mark

6. Which of the following statement is false?

- a) Computers can store and retrieve information using hard drives
- b) The CPU is the primary component of a computer that processes instructions
- c) An output device is any hardware device that sends data to a computer
- d) UPS is a device that allows a computer to keep running for at least a short time when the primary power source is lost

Correct Answer: c

1 Mark





7. What is the use of minimize button of the computer?

- a) Sends window to taskbar
- b) Opens the window
- c) Close the window
- d) Resizes the window

Correct Answer: a

1 Mark

8. Which combination is correct to display "*" symbol?

- a)  a) Num Lock + 8
- b)  b) Shift + 8
- c)  c) Alt + 8
- d)  d) Caps Lock + 8

Correct Answer: b

1 Mark

9. Complete the names of the devices given below and identify the output device:

- a) _ E _ _ O _ R D
c) W _ B _ _ M


- b) _ O _ S _
d) _ R _ _ T _ R

Correct Answer: d

2 Marks

10. Identify the device with the help of the description given below:

- A device that is made up of three main parts
- It consists of electronic circuitry
- It is the brain of the computer where most calculations take place



Correct Answer: b

2 Marks