

Total Questions : 35

Time : 1 hr.

PATTERN & MARKING SCHEME				
Section	(1) General Awareness	(2) Current Affairs	(3) Life Skills	(4) Achievers Section
No. of Questions	20	5	5	5
Marks per Ques.	1	1	1	2

SYLLABUS

Me and My Surroundings, Plants and Animals, India and the World, Science and Technology, Language and Literature, Earth and Its Environment, Transport and Communication, Sports, Maths Fun, Life Skills (Social Skills, Moral Values, Team Work, Communication), Current Affairs.

Achievers Section : Higher Order Thinking Questions from the above given Syllabus.

1. The edible part in the given picture is _____.

- (A) Stem (B) Leaf
(C) Root (D) Flower



2. Which of the following is NOT a bird?



3. Read the given statement carefully and identify the insect.

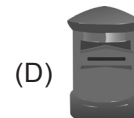

I collect nectar from flowers.



4. In twenty-20 Cricket '20' indicates that

- (A) Each team has 20 players (B) Each team scores 20 runs
(C) Each team plays for 20 overs (D) Each team plays for 20 minutes.

5. Find the odd one out.



6. Which term is related to the board game shown in the picture?

- (A) Catch (B) Checkmate
(C) Club (D) Love-all




7. When we sneeze, cough or yawn, we should always say

- (A) Thank you (B) Welcome
(C) Please (D) Excuse me.

8. Select the correct option.

- (i) (ii)
 (A) 12.00 pm 12.00 am
 (B) 0.00 am 0.00 pm
 (C) 12.00 am 12.00 pm
 (D) None of these



(i)



(ii)

ACHIEVERS SECTION

9. Select the INCORRECT match.

- (A) ₹ - India - Paisa (B) \$ - U.S.A. - Dollar
 (C) ¥ - Japan - Yen (D) £ - United Kingdom - Pound

10. Complete the following pattern.

(A) (B) (C) (D)

SPACE FOR ROUGH WORK

ANSWERS

1. (B) 2. (B) 3. (C) 4. (C) 5. (B) 6. (B) 7. (D) 8. (A) 9. (A) 10. (D)